

DYSRHYTHMIA BASIC A

Competency Exam Relias (2023)

Dysrhythmia – Basic A

Test Questions and Answers

Question 1 of 35

Time Remaining: 34



What is the cardiac rhythm?

- A Sinus tachycardia
- B Sinus rhythm with PVC
- C Normal sinus rhythm
- D Sinus rhythm with PAC

Question 2 of 35

Time Remaining: 33:46



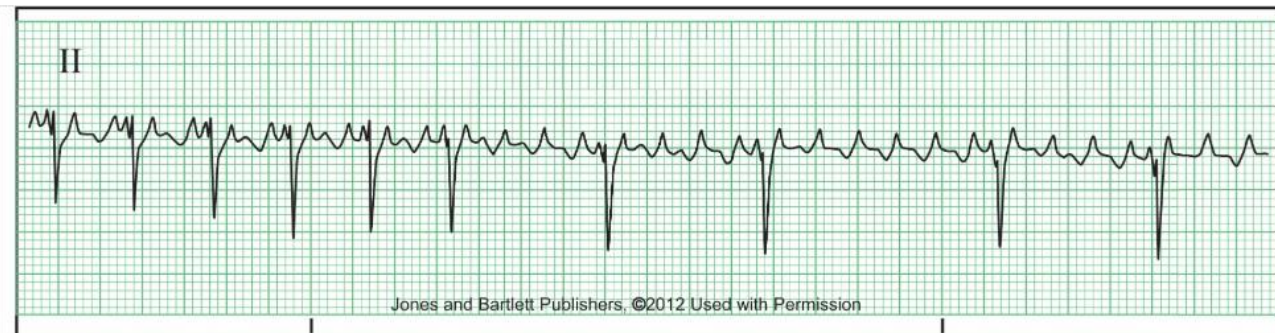
What is the cardiac rhythm?

- A 3rd degree heart Block
- B 2nd degree AV block - Type I (Mobitz I)
- C Sinus bradycardia
- D Sinus rhythm with 1st degree AV block



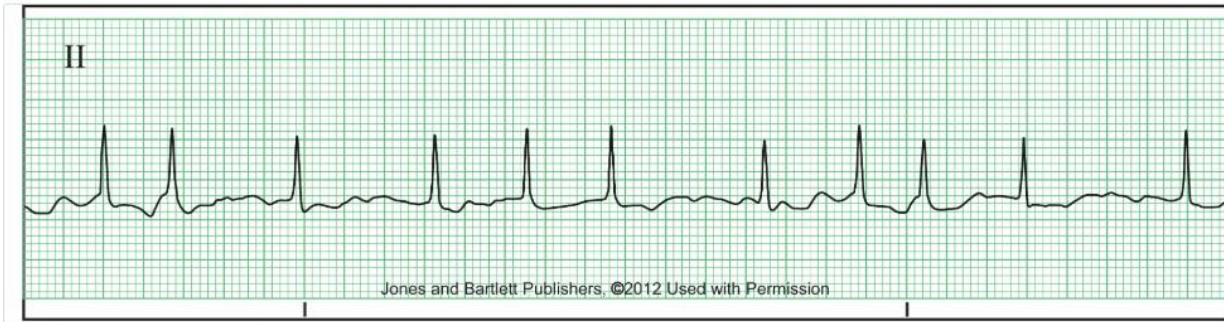
What is the cardiac rhythm?

- A Atrial fibrillation
- B Paced rhythm
- C Idioventricular
- D Junctional rhythm



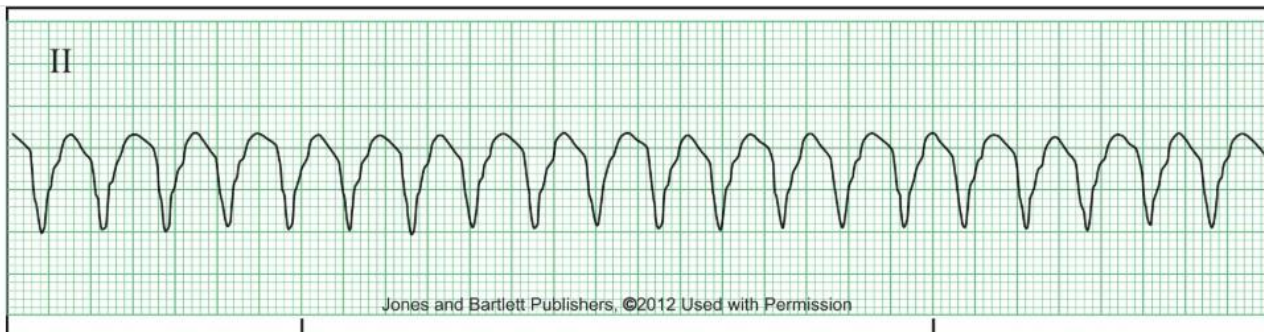
What is the cardiac rhythm?

- A Atrial flutter
- B Sinus rhythm with PACs
- C Atrial fibrillation
- D Atrial fibrillation with rapid ventricular response



What is the cardiac rhythm?

- A Atrial flutter
- B Atrial fibrillation with rapid ventricular response
- C Sinus tachycardia
- D Junctional rhythm



What is the cardiac rhythm?

- A Ventricular tachycardia
- B Sinus tachycardia
- C Ventricular fibrillation
- D Accelerated idioventricular

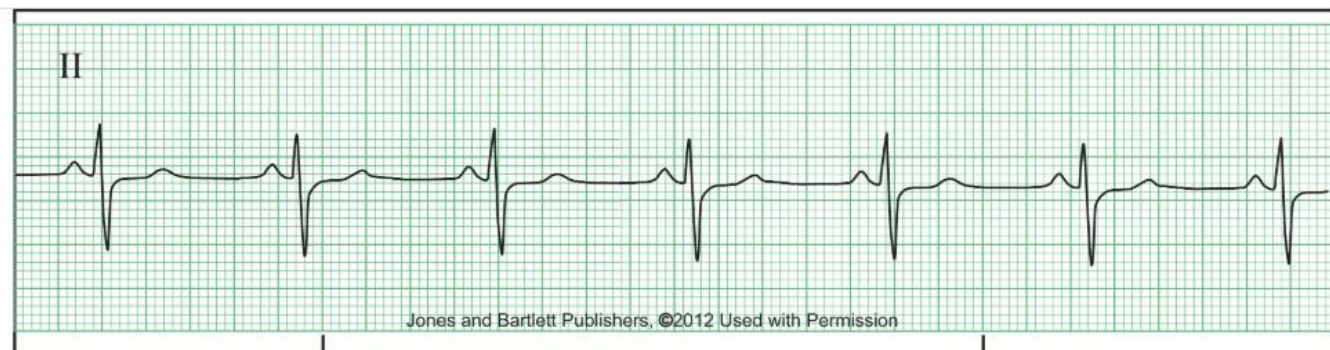


What is the cardiac rhythm?

- A Normal sinus rhythm
- B Sinus bradycardia
- C Junctional rhythm
- D Idioventricular rhythm

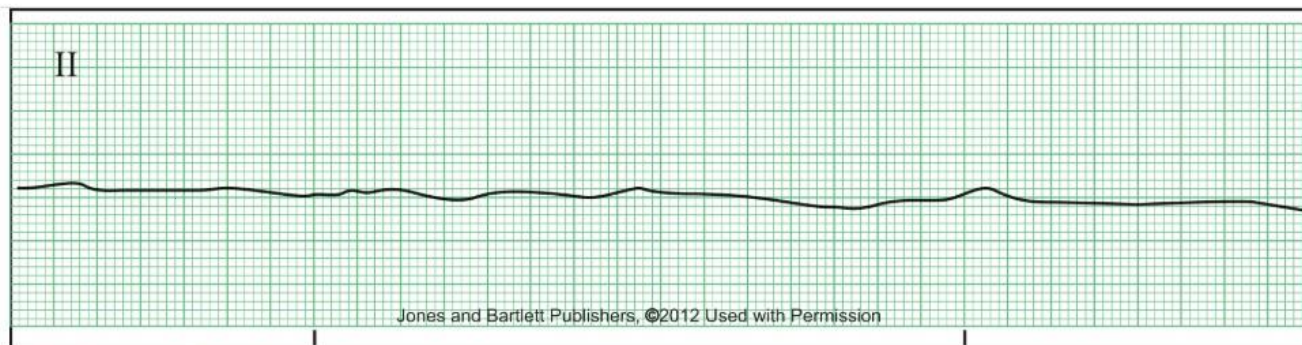
Question 8 of 35

Time Remaining: :



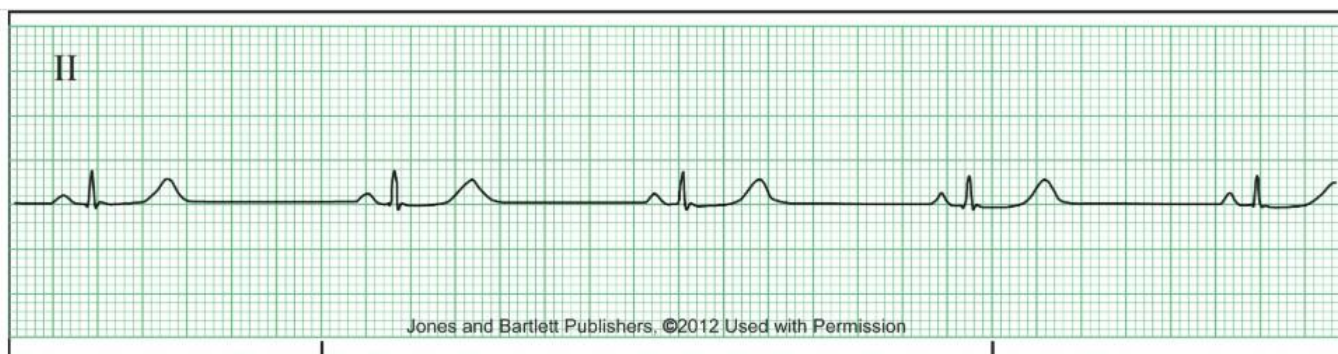
What is the cardiac rhythm?

- A Sinus rhythm with 1st degree AV block
- B Sinus bradycardia
- C Sinus rhythm
- D Sinus rhythm with PAC



What is the cardiac rhythm?

- A Atrial fibrillation
- B Ventricular tachycardia
- C Asystole
- D Idioventricular



What is the cardiac rhythm?

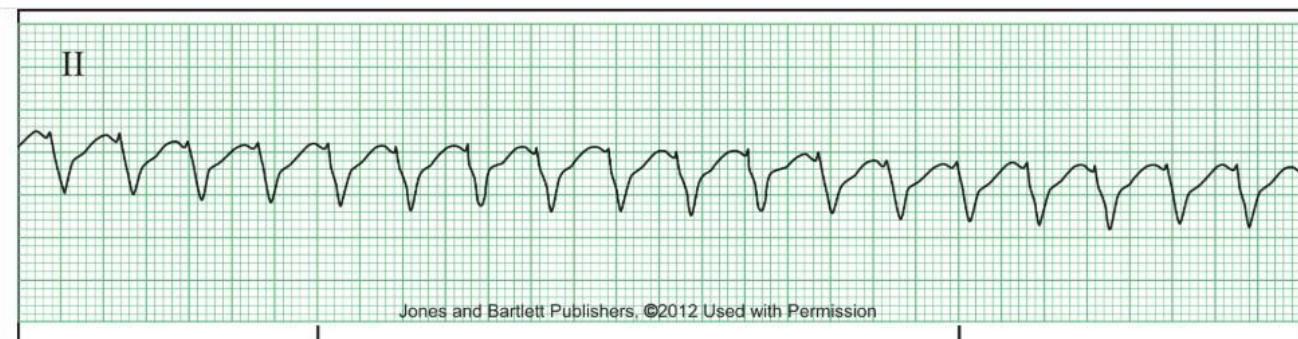
- A Junctional rhythm
- B Sinus bradycardia
- C Idioventricular rhythm
- D Normal sinus rhythm



What is the cardiac rhythm?

- A Sinus tachycardia
- B 2nd degree AV block - Type II (Mobitz II)
- C Sinus rhythm
- D Sinus bradycardia

Dysrhythmia - Basic A



What is the cardiac rhythm?

- A Junctional rhythm
- B Ventricular tachycardia
- C Ventricular fibrillation
- D Atrial flutter



What is the cardiac rhythm?

- A Sinus bradycardia
- B Atrial fibrillation
- C Coarse ventricular fibrillation
- D Asystole



What is the cardiac rhythm?

- A Atrial fibrillation
- B 3rd degree heart block
- C Sinus rhythm with PVCs
- D Sinus bradycardia